



NAME _____

DATE _____

MEASURING LENGTHS

Circle the picture that shows correct way to measure.

1)



5 centimeter
cubes



5 centimeter
cubes

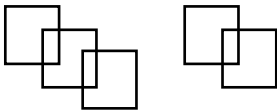


4 centimeter
cubes

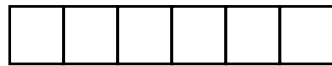


5 centimeter
cubes

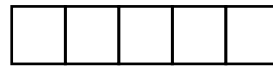
2)




5 centimeter
cubes



6 centimeter
cubes

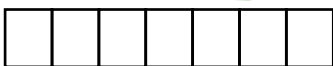


5 centimeter
cubes



5 centimeter
cubes

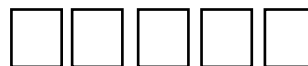
3)



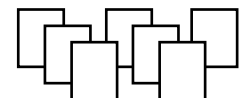
7 centimeter
cubes



6 centimeter
cubes



5 centimeter
cubes

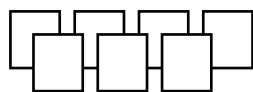


7 centimeter
cubes

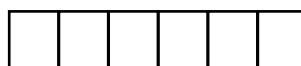
4)



7 centimeter
cubes



7 centimeter
cubes



7 centimeter
cubes



7 centimeter
cubes